

DISTRICT COMMON EXAMINATION BOARD, GUNTUR

SUBJECT : SOCIAL STUDIES

(English Medium)

RIVISON TEST - DAY - 1

Class : X

(Max. Marks : 20)

Time : 1 Hr.

Name : Section : No.

I. Answer the following questions.

4 x 1 = 4

1. Find out which is wrongly matched.
 - A) Jammu Hills - Jammu and Kashmir
 - B) Mishmi Hills - Arunachal Pradesh
 - C) Kochar - Assom
 - D) Patkai - Uttar Pradesh
2. The lake in odissa is _____
3. Name the Island group of India having coral origin.
4. "Luni" is the only river in this area _____

II. Answer the following questions

2 x 2 = 4

5. Mention the major relief divisions of Indian land marks.
6. Why do we often use the term "Indian Peninsula" ?

III. Answer any one of the following questions.

1 x 4 = 4

7. What is the influence of Himalayas on Indian Agriculture ?
8. Indo-Gangetic plains have high density of population. Find the reasons.

IV. Answer the following Questions.

1 x 8 = 8

9. How are the eastern coastal plains and western coastal plains similar or different ?

(Or)

10. Mark the following on an outline map of India.

- | | |
|-------------------|---|
| 1. K ₂ | 5. Godavari |
| 2. Chota Nagpur | 6. Malwa Plateau |
| 3. Vindya ranges | 7. The place situated on the three seas |
| 4. Kolleru lake | 8. Thar desert |

DISTRICT COMMON EXAMINATION BOARD, GUNTUR

SUBJECT : SOCIAL STUDIES

(English Medium)

RIVISON TEST - DAY - 2

Class : X

(Max. Marks : 20)

Time : 1 Hr.

Name : Section : No.

I. Answer the questions given below.

4 x 1 = 4

1. Gender bias means _____
2. Find the odd one _____
A) Norway B) USA C) Australia D) China
3. Define IMR.
4. How did Himachal Pradesh achieved high literacy rate ?

II. Answer the following questions.

2 x 2 = 4

5. What is literacy rate ?
6. Why do you think parents accord less priority to girls education as compared to boys /

III. Answer any one of the following questions.

1 x 4 = 4

7. What is the relationship between women's work outside their homes and gender bias ?
8. Why do we use Averages ? Are there any limitations to their use ?

IV. Answer the following question.

1 x 8 = 8

9. Some data regarding India and its neighbours for 2013.

Country	Per capita Income in \$	Life expectancy at birth (years)	Average years of schooling	Expected years of schooling	Human Development Index (HDI) rank in the world
Sri Lanka	5170	75.1	9.3	12.7	92
India	3285	65.8	4.4	10.7	136
Pakistan	2566	65.7	4.9	7.3	146
Myanmar	1817	65.7	3.9	9.4	149
Bangladesh	1785	69.2	4.8	8.1	146
Nepal	1137	69.1	3.2	8.9	157

- 1) Which country has the highest average years it schooling ?
- 2) How do we get per capita Income ?
- 3) As per the table which country has the best HDI rank ?
- 4) What is the lowest life expectancy at birth ?

(Or)

10. What main criterion is used by the World bank in classifying different countries ? What are the limitations of the above criterion if any ?

DISTRICT COMMON EXAMINATION BOARD, GUNTUR

SUBJECT : SOCIAL STUDIES

(English Medium)

RIVISON TEST - DAY - 3

Class : X

(Max. Marks : 20)

Time : 1 Hr.

Name : Section : No.

I. Answer the following questions.

4 x 1 = 4

1. Which is not the final good ?

A) Car

B) TV

C) Note book

D) Type

2. Identify the ODD one

A) Primary sector - Agriculture

B) Secondary sector - Banks

C) Tertiary sector - computers

3. Based on the first pair complete the second pair organised sector - 8% unorganised sector - % ?

4. Expand G.D.P. _____

II. Answer the following questions.

2 x 2 = 4

5. Why do the people not show interest in working in unorganised sector ?

6. Which measures do you suggest to improve the employment opportunities in rural area ?

III. Answer any one of the following questions.

1 x 4 = 4

7. Do you think the classification of economic activities into primary secondary and service sectors is useful ? Explain now ?

8. How is the service sector different from other sectors ? Illustrate with examples.

IV. Answer the following questions.

1 x 8 = 8

9. Draw a bar graph baring on the information given below

Sectors	-	Employment	
		1972 - 73	2009 - 10
Agriculture	-	74%	53%
Industries	-	11%	22%
Service	-	15%	25%

(Or)

10. In India unemployment and under employment became a major hindrance to the economic development of the country. Discuss this issue.

DISTRICT COMMON EXAMINATION BOARD, GUNTUR

SUBJECT : SOCIAL STUDIES

(English Medium)

RIVISON TEST - DAY - 4

Class : X

(Max. Marks : 20)

Time : 1 Hr.

Name : Section : No.

I. Answer the following questions.

4 x 1 = 4

1. Which of the following cities is not a hill station of Himalayas mountain region.

A) Gulmarg B) Darjiling C) Kodaicaneal D) Ninetal

2. Find the odd one from the following

A) Chaitra - Vaisakha - March - April
B) Sravana - Bhadra - July - August
C) Magha - Falguna - January - Februry
D) Aswayuja - Karthika - May - June

3. What is an important reason for formation of IPCC ?

4. Based on the first pair, complete the second pair.

Arab traders German _____ ? _____
Monsoon German Word _____
means track

II. Answer the following questions briefly.

2 x 2 = 4

5. Create any two slogans to prevent global warming ?

6. What is the reason for October heat ?

III. Answer any one of the following questions.

1 x 4 = 4

7. Describe India's climatic controls ?

8. What are the disagreements between developed and developing countries about A G W ?

IV. Answer any one of the following questions.

1 x 8 = 8

9. How are human activities contributing to global warming ?

(Or)

10. How is climate change causing global warming ? Suggest measures to minimize the influence the global warming ?

DISTRICT COMMON EXAMINATION BOARD, GUNTUR

SUBJECT : SOCIAL STUDIES

(English Medium)

RIVISON TEST - DAY - 5

Class : X

(Max. Marks : 20)

Time : 1 Hr.

Name : Section : No.

I. Answer all the questions.

4 x 1 = 4

1. Complete the second pair on the basis of Ist pair

i) The Indus :- Jammu and Kashmir

ii) Brahma Putra :- _____

2. Find the odd one

Godavari, Ganga, Cauvery, Mahanadi

3. The ore mined in Kudremukh is _____

A) Manganes B) Copper C) Gold D) Iron ore

4. ____ % of water is used for domestic purposes in India.

II. Answer the following questions.

2 x 2 = 4

5. What is the main defect of current law about ground water ?

6. What are the soil and water conservation works were implemented in Haware Bazar ?

III. Answer the following questions

1 x 4 = 4

7. Read the map

i) Name the rivers that join Ganges from the peninsular plateau ?

ii) What do chinese call Brahma Putra in China ?



8. Now a days we are all buying mineral water. What do you think would be the reason for this ?

IV. Answer any one of the following.

1 x 8 = 8

9. Point out the following on an outline map of India.

- | | |
|-------------------|-----------------|
| 1. Nasik | 5. Godavari |
| 2. Mahabaleswaram | 6. Brahma putra |
| 3. Ganga river | 7. Tungabhadra |
| 4. Krishna | 8. Kerala |

(Or)

10. Write about "WALTA" act ?

DISTRICT COMMON EXAMINATION BOARD, GUNTUR

SUBJECT : SOCIAL STUDIES

(English Medium)

RIVISON TEST - DAY - 6

Class : X

(Max. Marks : 20)

Time : 1 Hr.

Name : Section : No.

I. Answer the following questions.

4 x 1 = 4

1. Identify true statements.

- i) In India the first census was taken in 1972
- ii) The first complete census was taken in 1881
- iii) India's population is 1210 millions as of 2011 census

A) All are true B) i, ii C) ii, iii D) i, iii

2. The present fertility rate in India is _____

A) 5.6 B) 2.7 C) 2.5 D) 1.9

3. Define death rate ?

4. How was the sex ratio calculated ?

II. Answer the following questions.

2 x 2 = 4

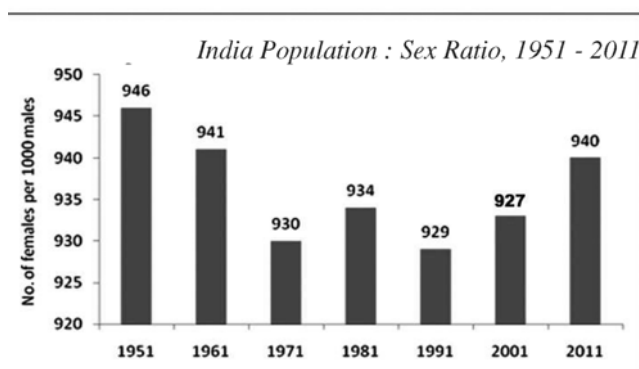
5. Distinguish between population growth and population change.

6. What is the importance of working age of population ?

III. Answer any one of the following

1 x 4 = 4

7. Observe the following graph and answer the questions.



1) What is meant by sex ratio ?

2) When was the sex ratio is high ?

3) How was the sex ratio from 1991 - 2011 ?

4) How was the sex ratio from 1951 - 2011 ?

8. "India's population has been increasing you supporting this statement" How ?

[Turn Over

Day - 6

2

IV. Answer any one of the following.

1 x 8 = 8

9. Compare Indian literacy rate with other countries ? What similarities and differences do you note ?

(Or)

10. Observe and analyse the posters.



DISTRICT COMMON EXAMINATION BOARD, GUNTUR

SUBJECT : SOCIAL STUDIES

(English Medium)

RIVISON TEST - DAY - 7

Class : X

(Max. Marks : 20)

Time : 1 Hr.

Name : Section : No.

I. Answer the following questions.

4 x 1 = 4

1. What was the early man tools made of ?
2. Find the different one among the following.
Jowar, rice, meat, dal
3. Which pair is not suitable from
 1. Bucket - Aluminium / plastic
 2. Glass - Steel
 3. Plate - Steel / plastic
 4. Jar - Rubber
4. Give an example of metropoliton cities.

II. Answer the following questions.

2 x 2 = 4

5. What is a settlement ?
6. Explain about Jet city ?

III. Answer the following questions.

1 x 4 = 4

7. How did human life styles change with settlement ?

(Or)

8. Delhi is the second biggest city in the country. Explain the reason for it ?

IV. Answer the following questions.

1 x 8 = 8

9. **Population of Visakhapatnam**

Year	Population	% change
1901	40,892	
1911	43,414	+6.2%
1921	44,711	+3.0%
1931	57,303	+28.2%
1941	70,243	+22.6%
1951	1,08,042	+53.8%
1961	2,11,190	+95.5%
1971	3,63,467	+72.1%
1981	6,03,630	+66.1%
1991	7,52,031	+24.6%
2001	13,45,938	+78.97%
2011	20,35,690	+51.2%

[Turn Over

Day - 7

2

- i) Which decade's data is not reported here ?
- ii) From which decade to which decade has the population increase been the highest ?
- iii) From which decade to which decade has the population increase been the least ?
- iv) Which city has long history ?

(Or)

10. Define the site features and situation features. Give an example for each.

DISTRICT COMMON EXAMINATION BOARD, GUNTUR

SUBJECT : SOCIAL STUDIES

(English Medium)

RIVISON TEST - DAY - 8

Class : X

(Max. Marks : 20)

Time : 1 Hr.

Name : Section : No.

I. Answer the following questions.

4 x 1 = 4

1. Arrange these states from west to east according to their location.

West Bengal, Assam, Maharashtra, Odisha

2. Expand UNDP ?

3. Which is the main cause of women migration ?

4. Re-arrange the following statements ?

i) The type centre settlements have 50 - 100 kopies.

ii) Gadi centres have 250 - 500 kopies.

II. Answer the following questions.

2 x 2 = 4

5. Define migration what are the reasons for migration ?

6. What are the problems of migrant workers of labourers ?

III. Answer the following questions.

1 x 4 = 4

7. Why are unskilled workers from India wanted in West Asian countries ?

8. Which is considered as seasonal migration ? Why ?

IV. Answer the following questions.

1 x 8 = 8

9. Why only professionals are able to go to developed countries ? Why cannot unskilled workers migrate to these countries ?

(Or)

10. Most children of migrant families become dropouts ? Do you agree with this statement ?
Justify your answer.

DISTRICT COMMON EXAMINATION BOARD, GUNTUR

SUBJECT : SOCIAL STUDIES

(English Medium)

RIVISON TEST - DAY - 9

Class : X

(Max. Marks : 20)

Time : 1 Hr.

Name : Section : No.

I. Answer all the questions.

4 x 1 = 4

1. Write full form of MNREGA ?
2. The correct set of matching.

Group - A

Group - B

- | | |
|----------------------|------------|
| i) Kharif crop | - a) Land |
| ii) Natural resource | - b) Wheat |
| iii) Rabi crop | - c) Jowar |

3. Identify the odd one.

Dairy form, sugar cane cultivation, transport activities, sugarcane crushing activities.

4. Based on the information given in the first pair, complete the second pair ?

- i) Rainy season - Kharif
- ii) Winter season - _____ ?

II. Answer the following questions.

2 x 2 = 4

5. Why are farm labourers like dala poor ?
6. How do the small farmers procure the capital needed for farming ?

III. Answer any one of the following.

1 x 4 = 4

7. Why are the wages for farm labourers in Rampur less than minimum wages ?

(Or)

8. How is land requirement in significant in the process of production.

IV. Answer any one of the following.

1 x 8 = 8

9. How do the medium and large farmers obtain capital for farming ? How is it different from the small farmers ?

(Or)

10. Modern farming methods require more inputs which are manufactured in industrial do you agree with this statement ? Justify your comment.

DISTRICT COMMON EXAMINATION BOARD, GUNTUR

SUBJECT : SOCIAL STUDIES

(English Medium)

RIVISON TEST - DAY - 10

Class : X

(Max. Marks : 20)

Time : 1 Hr.

Name : Section : No.

I. Answer the following questions.

4 x 1 = 4

1. Expand MNC ?
2. Based on the information given in the first pair complete the second.
 - i) Corgill foods : USA
 - ii) Parakh foods : _____
3. Identify the MNC belongs India in the following.
A) Nokia B) Ranbaxy C) Nike D) Honda
4. Identify the wrong match in the following.
 - a) Tata motors – Automobiles
 - b) Infosys – IT
 - c) Sundaram fasteners – Food items
 - d) Ranbaxy – Medicines

II. Answer the following questions.

2 x 2 = 4

5. What do you mean by international trade barrier ?
6. What is SEZ, explain ?

III. Answer any one of the following.

1 x 4 = 4

7. Draw a graph basing an this information.

Year	1950	1960	1970	1980	1990	2000	2010
(Cultivated in million hectares)	120	130	130	135	140	140	140

8. How would flexibility in labour laws help companies.

IV. Answer the following questions.

1 x 8 = 8

9. Globalisation will continue in the future. How would be the world after 30 years from now ?

(Or)

10. How has liberalisation of trade and investment policies helped the globalisation process ?

DISTRICT COMMON EXAMINATION BOARD, GUNTUR

SUBJECT : SOCIAL STUDIES

(English Medium)

RIVISON TEST - DAY - 11

Class : X

(Max. Marks : 20)

Time : 1 Hr.

Name : Section : No.

I. Answer the following questions.

4 x 1 = 4

1. Identify the odd one.

Jowar, ragi, rice, bajra

2. In which state 1943 - 45 the famine was occurred.

A) Rajastan

B) Andhrapradesh

C) Bengal

D) Tamilnadu

3. Expand MSP.

4. Write two slogans an avoid of food wastage ?

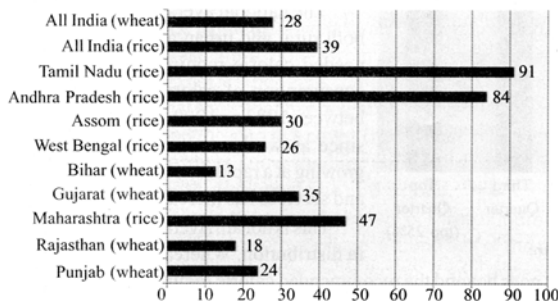
II. Answer the following questions.

2 x 2 = 4

5. Write about national food security act.

6. Read the bar graph and answer the questions.

Percentage Share of Purchases from PDS, rice and wheat, 2009-10



i) Expand P.D.S ?

ii) Which state share of purchases from PDS is high ?

iii) Which state share of purchase of wheat from PDS is low ?

iv) Which state buys more wheat ?

III. Answer the following questions.

1 x 4 = 4

7. Give some suggestions to improve the working PDS ?

(Or)

8. Describe the relationship between increase in food production and food security ?

IV. Answer the following questions.

1 x 8 = 8

9. Give reasons to argue for the following statements public distribution system can ensure better food security for people.

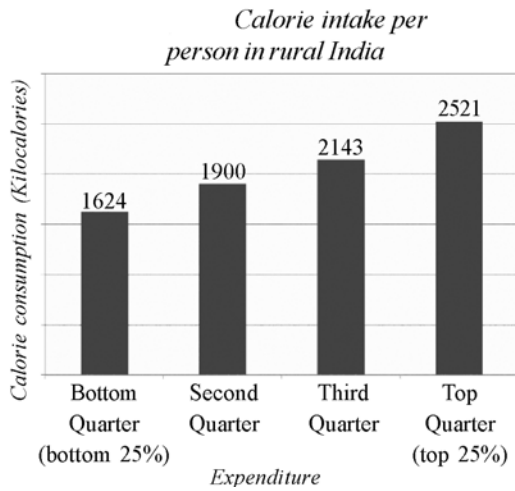
(Or)

[Turn Over

Day - 11

2

10. Observe the graph and answer the following questions.



- i) What does the bar graph show ?
- ii) How much kilo calories intake should a rural person take per day ?
- iii) Which group of persons is 2143 kilo calories ?
- iv) How much percentage of people in rural areas in India consume below the calorie standard.

DISTRICT COMMON EXAMINATION BOARD, GUNTUR

SUBJECT : SOCIAL STUDIES

(English Medium)

RIVISON TEST - DAY - 12

Class : X

(Max. Marks : 20)

Time : 1 Hr.

Name : Section : No.

I. Answer the following questions.

4 x 1 = 4

1. Find the wrong pair

- A) Kenya - Massai warrior
- B) Tibet - Gancho tribe
- C) Kazakhstan - Yurta tribe

2. Main aim of chipko movement

- A) Save animals
- B) Cutting forests
- C) Save trees
- D) None

3. Which city air pollution came down by using compressed natural gas ?

4. Expand DDT _____

II. Answer the following questions.

2 x 2 = 4

5. What is sustainable development ?

6. Observe the picture and answer the following questions.



i) In which year this book was written ?

ii) This book reveals about _____

III. Answer the following questions.

1 x 4 = 4

7. Why do you think the effects of climate change may be felt by all countries ?

8. What are the various ways in which our life styles affect the environment ?

IV. Answer any one of the following.

1 x 8 = 8

9. Rapid extraction of minerals and other natural resources would adversely impact the future development prospects. Do you agree ?

(Or)

10. What kind of environmental problems did the spread of green revolution "create what lessons does this have for the future ?