

# ANSWERS FOR THE PROPOSED BSEAP QUESTION PAPER SOCIAL STUDIES ENGLISH MEDIUM



VISIT BEST SOCIAL TEACHER WEBSITE DEDICATED FOR  
EXCELLENCE IN SOCIAL STUDIES

సాంఘిక శాస్త్రం సమున్నతం

FOR LATEST UPDATES IN SOCIAL STUDIES LOG ON TO

<https://www.bestsocialteacher.com/>

**PREPARED BY**  
**KSV KRISHNA REDDY,**  
**GHM, ZPHS, GANTI, EGDt.**

**ADMIN : BEST SOCIAL TEACHER**  
**WHATSAAP GROUP**

**9492146689**



**SSC PUBLIC EXAMINATIONS : JULY-2020  
SOCIAL STUDIES - PAPER - I & II  
MODEL PAPER  
(English Medium)**

**Time: 3.15 Hrs.**

**Max. Marks : 100 Marks**

**Instructions:**

1. 15 Minutes are allotted for reading the question paper in addition to 3.00 hours for writing the answers.
2. All answers should be written in the separate answer booklet.
3. There are four sections in the question paper.
4. There is internal choice in Section-IV.

[www.bestsocialteacher.com](http://www.bestsocialteacher.com)

**SECTION – I**

- Note:**
1. If any question is answered more than once in this section, the earlier answer will only be considered.
  2. Answer all the questions.
  3. Each question carries 1 Mark.

**12 × 1 = 12 M**

1. Give any two examples for perennial rivers.
2. Identify the wrongly matched pair and write it in the answer booklet.

<b>Primary Sector</b>	<b>Fishing</b>
<b>Secondary Sector</b>	<b>Mining</b>
<b>Tertiary Sector</b>	<b>Banking</b>

3. Which mountains cause very low amount of rainfall in Thar Desert ?
4. Census is about to start in India soon. 'A' says that this census shows age structure, gender ratio and literacy rate. 'B' says that it shows the size and density of population. Who is correct ?
  - A only
  - B only
  - A & B both
  - None of the above
5. Poorest of the poor have a provision to get 35 kgs of grains per month under PDS. Name the ration card related to this.
6. Which of the following place is nearer to the equator ?
  - Trivandrum
  - Kanyakumari
  - Chennai
7. Expand U.S.S.R
8. The relation between the items in the first pair is the same with those in the second pair. Find out the missed item of the second pair.

Vietnam : France : : India : ?





9. The picture given below is the logo of which international organisation ?

LOGO	INTERNATIONAL ORGANISATION
	<a href="http://www.bestsocialteacher.com">www.bestsocialteacher.com</a>

10. In which state did the Anti-Hindi agitation started ?

11. The chairman of the Constitutional Drafting Committee was ..... (Fill up the blank)

12. Based on the information given below, answer the question that follows.

Beginning of First World War	Russian Revolution	Treaty of Versailles	Breakout of Second World War	German Invasion of USSR
1914	1917	1919	1939	1942

**Q. Name the country which withdrew from the World War I before the War ?**

### SECTION – II

**Note:** 1. Answer all the Questions.

2. Each Question carries 2 Marks.

**8 × 2 = 16**

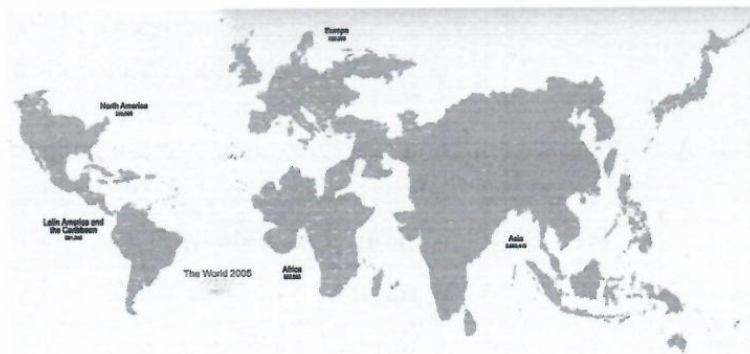
13. What is meant by working capital ?

14. It is better to ban the use of plastic carry bags. Write your opinion on this.

15. Plot the below information on a bar graph (rough).

Year	Cultivated area (in million hectares)
2000	140
2010	140

16. Observe the below world map which is based on the basis of population and answer the question that follows.



**Q. Asian Continent looks the largest in the above map. Why ?**

17. Mention any two environmental problems faced by Nigeria.
18. What is the importance of 1977 elections in India ?
19. **Observe the following table and answer the given questions.**

*Coalition Governments and some political parties from 1980s*

Governing Parties	National Front 1989-1990	Governing Parties	United Front 1996-1998	Governing Parties	National Democratic Alliance 1998-2004	Governing Parties
JD; DMK; AGP; TDP ; Jammu & Kashmir National Conference (JKNC)		JKNC; TDP; TMC; CPI; AGP; DMK; MGP; Samajwadi Party		JDU; SAD; AIADMK, JKNC; Trinamool Congress; Biju Janata Dal ; Shiva Sena ;		
Supporting Parties		Supporting Parties		Supporting Parties		Supporting Parties
CPM; CPI, BJP		CPM		TDP		

This is not a complete list of political parties that either supported for were part of the government. Often we have listed only those parties that had more 5 or MPs

[www.bestsocialteacher.com](http://www.bestsocialteacher.com)

- 1) What are the Governing parties from 1989-1990.
- 2) What are the parties in NDA ?
20. "I have a dream that my four little children will one day live in a nation where they will not be judged by the colour of their skin but by the content of their character ...

*Dr. Martin Luther King Jr.*

**Express the sensitivity in this speech.**

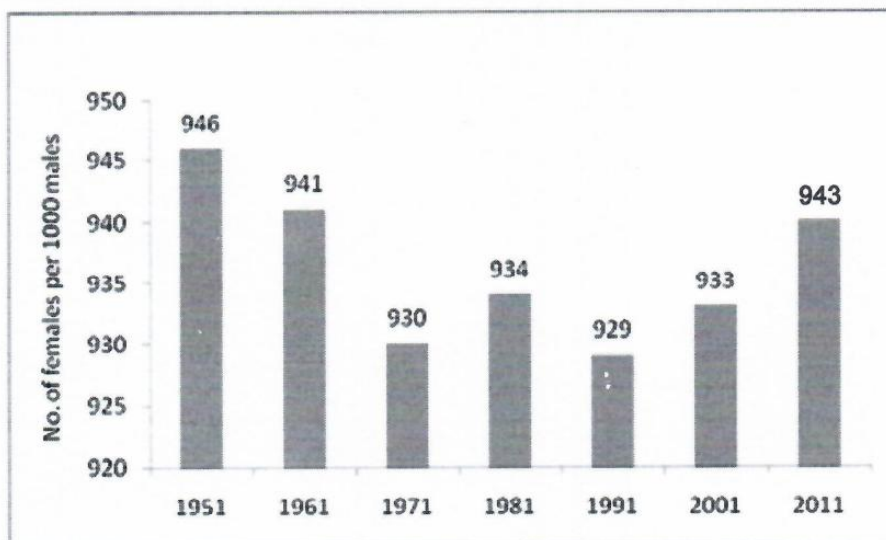
### SECTION – III

**Note:** 1. Answer all the Questions.

2 Each Question carries 4 Marks.

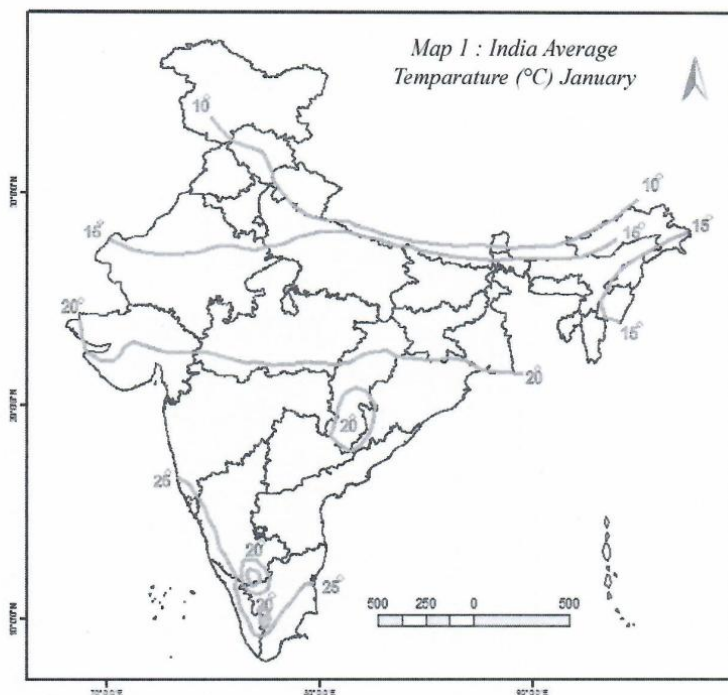
$8 \times 4 = 32$

21. Suggest the precautions we can take to prevent the spread of Corona virus.
22. Mention any four important aspects that attracted you about the Schooling Revolution in Himachal Pradesh.
23. Observe the graph given below and write your observations.





24. Based on the map given below, name any four states which record average temperature more than 15 degree in the month of January. [www.bestsocialteacher.com](http://www.bestsocialteacher.com)



25. Who is regarded as the father of modern China ? What were the 'three principles of his programme ?
26. Write about the League of Nations.
27. Mention the Constitutional provisions that facilitate social change.
28. Explain the role played by women in Anti arrack movement in the then Andhra Pradesh.

#### **SECTION-IV**

**Note:** 1. Answer all the Questions.

2. Each Question carries 8 Marks.

**5 × 8 = 40**

29. Explain about the structural features of the Western Ghats.

**(OR)**

Describe the monsoon mechanism of India.

30. What measures are being taken up by the government for the development of government schools in Andhra Pradesh ? Explain.

**(OR)**

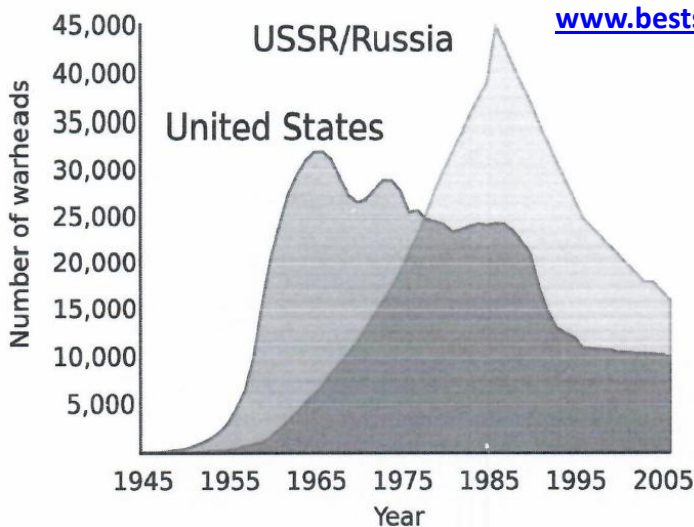
Explain the problems of migrant labourers ?

31. Hitler said, "We do not consider it correct for the woman to interfere in the world of the man, in his main sphere" - How far are his words justifiable ? Give your opinion.

**(OR)**

"The emergency period was a setback to the Indian democracy" - Do you agree with this statement ? Explain.

32. Based on the information given in the graph below, mention any four aspects of the Cold War.



**Graph 1 : US and USSR nuclear stockpiles**

**(OR)**

Based on the information given below, answer the questions given.

**Time line**

Beginning of First World War July 28	• 1914
Russian Revolution	• 1917
End of First World War	• 1918
Treaty of Versailles	• 1919
Formation of League of Nations	• 1919
Rise of Hitler in Germany	• 1933
Breakout of Second World War	• 1939
German Invasion of USSR	• 1941
Formation of United Nations Organisation	• 1945
End of Second World War August	• 1945

- Who won the Second World War ?
- What was the immediate provocation of World War II ?
- Mention the super power that joined lately in the World War II.
- Name the person who was mainly responsible for the mass murder of the Jews.





33. A) Mark the following on the outline map of India.

4 M

- |                        |  |                  |
|------------------------|--|------------------|
| a) 1) Delhi            | <a href="http://www.bestsocialteacher.com">www.bestsocialteacher.com</a> | b) 1) Aravalis   |
| 2) Lakshadweep islands | (OR)   | 2) River Krishna |
| 3) River Godavari      |  | 3) Sikkim        |
| 4) Arunachal Pradesh   |  | 4) Indian Ocean  |

B) Mark the following on the outline map of the world.

4 M

- |             |                         |
|-------------|-------------------------|
| a) 1) Egypt | b) 1) Meditteranean Sea |
| 2) Portugal | (OR) 2) Srilanka        |
| 3) China    | 3) Equator              |
| 4) USA      | 4) France               |



**సాంఘిక శాస్త్రం సమున్నతం**

**PREPARED BY  
KSV KRISHNA REDDY,  
GHM, ZPHS, GANTI, EGDt.  
ADMIN : BEST SOCIAL TEACHER  
WHATSAAP GROUP  
9492146689**



# VISIT BEST SOCIAL TEACHER WEBSITE DEDICATED FOR EXCELLENCE IN SOCIAL STUDIES

**33. A) Mark the following on the outline map of India.**

- |                           |                  |
|---------------------------|------------------|
| a) 1. Himalayan Mountains | b) 1. Aravalis   |
| 2. Lakshadweep islands    | 2. River Krishna |
| 3. River Godavari (OR)    | 3. Sikkim        |
| 4. Aurnachal Pradesh      | 4. Indian Ocean  |

[www.bestsocialteacher.com](http://www.bestsocialteacher.com)

**B) Mark the following on the outline map of the world.**

- |               |                         |
|---------------|-------------------------|
| a) 1. Egypt   | b) 1. Mediterranean Sea |
| 2. Portugal   | 2. Sri Lanka            |
| 3. China (OR) | 3. Equator              |
| 4. USA        | 4. France               |



## సాంఘిక శాస్త్రం సమున్నతం

**PREPARED BY  
KSV KRISHNA REDDY,  
GHM, ZPHS, GANTI, EGDt.  
ADMIN : BEST SOCIAL TEACHER  
WHATSAAP GROUP  
9492146689**





**ANSWERS FOR THE  
PROPOSED BSEAP  
QUESTION PAPER  
SOCIAL STUDIES  
ENGLISH MEDIUM**



**సాంఘిక శాస్త్రం సమున్నతం**

FOR LATEST UPDATES IN SOCIAL STUDIES LOG ON TO  
<https://www.bestsocialteacher.com/>

**PREPARED BY  
KSV KRISHNA REDDY,  
GHM, ZPHS, GANTI, EGDt.  
ADMIN : BEST SOCIAL TEACHER  
WHATSAAP GROUP  
9492146689**



# VISIT BEST SOCIAL TEACHER WEBSITE DEDICATED FOR EXCELLENCE IN SOCIAL STUDIES

## SECTION – I

1. A. Examples for Perennial rivers:  
The Ganges and the Brahmaputra.
2. A. Secondary Sector - Mining.
3. A. Aravali Mountains
4. A. Both A & B
5. A. Antyodaya Cards
6. A. The places nearer to the equator is – Kanyakumari
7. A. U.S.S.R – “Union of Soviet Socialist Republic”.
8. A. Vietnam : France :: India : ‘Britain’.
9. A. UNO – “United Nations Organisation”.
10. A. Tamil Nadu.
11. A. B.R. Ambedkar.
12. A. Russia

## SECTION – II

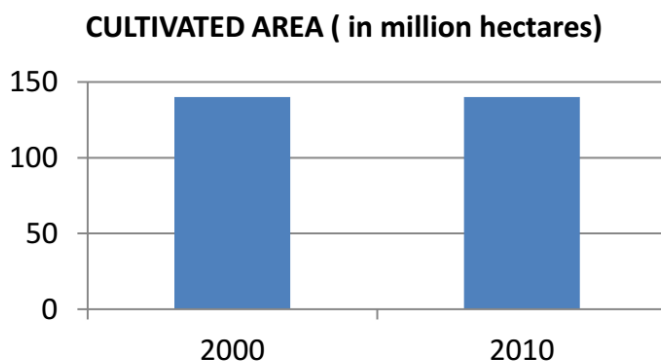
13. A. WORKING CAPITAL:  
The money required to buy necessary materials for production and to make payments for completing the production process is called ‘Working Capital’.
14. A.
  1. Yes. I do agree with the statement.
  2. Ban on plastic carry bags in an urgent need to protect environment and to stop pollution.
  3. Plastic bags don't biodegrade, they photodegrade – breaking down into smaller and smaller toxic bits.
  4. A plastic bag can take between 400 to 1,000 years to break down in the environment.



# VISIT BEST SOCIAL TEACHER WEBSITE DEDICATED FOR EXCELLENCE IN SOCIAL STUDIES

4. As it breaks down, plastic particles contaminate soil and waterways and enter the food web when animals accidentally ingest them.
5. The prime minister in his Independence Day speech last year had promised to crack down on single-use plastic from 2 October 2019, the 150th birth anniversary of Mahatma Gandhi.

15.A.



16. A.
  1. Asia has the largest populous countries like China and India.
  2. These two countries occupy the first two places as the highest populous countries.
  3. This world map has been drawn on the basis of population.
  4. So, the Asian continent looks big while comparing with other continents.
  5. Now the world population is around 759 Crores. The Asian continent's population is 446 Crores.

17. A. Environmental problems faced by Nigeria:

Reckless oil extraction without care for the environment by foreign oil companies in Nigeria has created havoc in coastal environment.

# VISIT BEST SOCIAL TEACHER WEBSITE DEDICATED FOR EXCELLENCE IN SOCIAL STUDIES

	<ol style="list-style-type: none"> <li>1. Oil spillage from oil wells has a major impact on the ecosystem. Large tracts of the mangrove forests, which are especially susceptible to oil, have been destroyed.</li> <li>2. Spills destroy crops and aqua culture through contamination of the groundwater and soils.</li> </ol>	
18. A.	<u>Importance of 1977 elections in India:</u> <ol style="list-style-type: none"> <li>1. The 1977 election was a historic election for Indian democracy.</li> <li>2. The Congress party was defeated for the first time in 1977.</li> <li>3. The Janata Party attempted to consolidate itself by dismissing nine Congress governments in the states.</li> <li>4. The Janata Party had come to power promising a restoration of democracy and freedom from authoritarian rule.</li> </ol>	
19. A.	<ol style="list-style-type: none"> <li>1. Janatha dal, DMK, AGP, TDP, Jammu Kashmir national Conference (JNC) etc.</li> <li>2. JDU, SAD, AIADMK, JKNC, Trinamool congress, Biju Janthadal, Shiv sena</li> </ol>	
20. A.	<u>Slogans against alcohol consumption:</u> <ol style="list-style-type: none"> <li>1. Alcohol: You use, You lose.</li> <li>2. Boozer is a loser.</li> <li>3. Love your family not alcohol.</li> <li>4. Stop drinking – Start living.</li> </ol>	
	<u>SECTION – III</u>	
21. A.	<u>Precautions to prevent the spread of Corona virus:</u> <ol style="list-style-type: none"> <li>1. Wash your hands often with soap and water for at least 20 seconds, especially after going to the bathroom; before eating; and after blowing your nose, coughing, or sneezing.</li> <li>2. If soap and water are not readily available, use an alcohol-based hand sanitizer with at least 60% alcohol. Always wash hands with soap and water if hands are visibly dirty.</li> <li>3. Avoid touching your eyes, nose, and mouth with unwashed hands.</li> <li>4. Avoid close contact with people who are sick.</li> <li>5. Cover your cough or sneeze with a tissue, then throw the tissue in the trash and wash your hands.</li> <li>6. If you don't have a tissue, cough or sneeze into your elbow, rather than into your hands.</li> <li>7. Clean and disinfect frequently touched objects and surfaces.</li> <li>8. If you have a fever, cough and difficulty breathing, seek medical attention. Call in advance.</li> <li>9. Follow the directions of your local health authority.</li> </ol>	

[www.bestsocialteacher.com](http://www.bestsocialteacher.com)

[www.bestsocialteacher.com](http://www.bestsocialteacher.com)



# VISIT BEST SOCIAL TEACHER WEBSITE DEDICATED FOR EXCELLENCE IN SOCIAL STUDIES

22. A. Important aspects in the schooling revolution in Himachal Pradesh:
1. Both the government of Himachal Pradesh and the people of the state were keen on education.
  2. The government started schools and given education on a cost free and little burden to parents.
  3. Provided the minimum facilities of teachers, class rooms, toilets, drinking water etc.
  4. Himachal Pradesh has spending highest amount of money on education for each child.

23. A. Sex ratio in India 1951- 2001 – Observation of Graph.
1. Sex ratio is the number of females per 1000 males in the population.
  2. This information is an important social indicator to measure the extent of equality between men and women in a society.
  3. in my observation I notice that the number of females in India has consistently been lower than that of men.
  4. This female/ male ratio, the 'sex ratio' is a cause of concern since it indicates hidden form of discrimination.
  5. Women and girls in particular face unequal opportunities for education and development.
  6. In the most basic needs of nutrition, child care and health also they are discriminated against – they get less of these things than males.
  7. A distressing aspect of gender bias in India that shows little sign of going away is the preference for boys over girls.
  8. One of the worst manifestations of this pro-male bias is the relatively higher mortality rates of girls compared with boys.

24. A. The states which record average temperature of 15 degrees in the month of January:

1. Gujarat
2. Madhya Pradesh
3. Chattisgarh
4. Odisha
5. Goa
6. Karnataka
7. Kerala
8. Tamilnadu



# VISIT BEST SOCIAL TEACHER WEBSITE DEDICATED FOR EXCELLENCE IN SOCIAL STUDIES

25. A. The Founder of modern China was “Sun Yat-Sen” (1866-1925).  
His program was called “the Three Principles”
1. San - “Nationalism”
  2. min - “democracy”
  3. chi - “socialism”.
- 
26. A. League of Nations:
1. The Treaty of Versailles set up the League of Nations.
  2. The League of Nations had 58 members.
  3. The League of Nations also set up health, labour welfare and an International Court of Justice.
  4. The League of Nations failed to prevent Germany and Italy from violating international agreements and attacks.
- 
27. A. Constitutional provisions that facilitate social change:
1. The Constitution has many provisions facilitating social change.
  2. The abolition of Untouchability.
  3. The provision for reservations for Scheduled Castes and Scheduled Tribes in the Constitution.
  4. Right to vote.
  5. The reservation of seats in legislatures.
  6. Reservations in public sector jobs.
  7. The right of minorities.
  8. The right of religious minorities to run their own educational institutions. Etc.,
- 
28. A. Role of women in Anti arrack movement in Andhra Pradesh:
1. The women in Dubagunta in Nellore village read sitamma’s story “Adavallu ekamaite” in evening school and get inspired.
  2. So next day, hundreds of them marched out of the village and stopped a cart of toddy.
  3. They told the owner to throw away the liquor and he was terrified.
  4. In several villages shops had to face picketing, throwing out liquor packets and setting the alcohol on fire. Only women done all these things.
  5. After innumerable meetings and protests by women across the state, arrack was officially banned by government in 1993 and total prohibition was implemented in 1995.
  6. This is really a great achievement of women who are uneducated and of rural background.



# VISIT BEST SOCIAL TEACHER WEBSITE DEDICATED FOR EXCELLENCE IN SOCIAL STUDIES

## SECTION – IV

### 29. A. The structural features of the Western Ghats:

1. The Western Ghats lie parallel to the west coast.
2. The structure of Western Ghats is continuous with a few passes as the gateways to the coastal plains.
3. The Western Ghats are higher than the Eastern Ghats.
4. The Western Ghats extend for 1600 kms.
5. Near Gudalur the Nilgiris join the Western Ghats and they rise to over a height of about 2000 mts.
6. The famous hill station Udagamandalam, popularly known as Ooty, is located in Nilgiris, Doda Betta (2637 mts) is the highest peak.
7. Western Ghats include the Anaimalai, Palani (Tamilnadu) and Cardamom (Kerala) hills.
8. Annaimudi (2695 mts) of Annamalai hills is the highest peak in south India.
9. Rivers that originate in Western Ghats like Godavari and Krishna cut across the plateau and join the Bay of Bengal.

[www.bestsocialteacher.com](http://www.bestsocialteacher.com)

[www.bestsocialteacher.com](http://www.bestsocialteacher.com)



KSV KRISHNA REDDY, GHM, ZPHS, GANTI, EAST GODAVARI 9492146689

Don't post in any other websites [www.bestsocialteacher.com](http://www.bestsocialteacher.com)



# VISIT BEST SOCIAL TEACHER WEBSITE DEDICATED FOR EXCELLENCE IN SOCIAL STUDIES

(OR)

- 29.B)
1. Monsoons are seasonal winds that bring moist air from oceans and seas over land.
  2. Arab traders named the seasonal wind system as 'monsoon'.
  3. Monsoon winds are caused by thermal contrast, the inter-tropical convergance and the upper air circulation.
  4. An intensive low pressure develops on the land surface during the summer season.
  5. It draws air from the high pressure region of the seas leading to the in-blowing of south-west monsoons
  6. The bulk annual rainfall in India is received from south-west monsoon.
  7. October - November is a period of the retreat of the monsoons.
  8. June - September is a period of the retreat of the south-west monsoon.
  9. During the winter, the pressure conditions in the area are reversed and so are the winds.
  10. This time low pressure system develops in the seas which draws air from the landmass particularly blowing from north-east and form the north-east monsoons
  11. During the south-west monsoon period cyclonic depressions which originate over the Andaman area.

[www.bestsocialteacher.com](http://www.bestsocialteacher.com)

[www.bestsocialteacher.com](http://www.bestsocialteacher.com)



సాంఘిక శాస్త్రం సమున్నతం

KSV KRISHNA REDDY, GHM, ZPHS, GANTI, EAST GODAVARI 9492146689

Don't post in any other websites [www.bestsocialteacher.com](http://www.bestsocialteacher.com)

# VISIT BEST SOCIAL TEACHER WEBSITE DEDICATED FOR EXCELLENCE IN SOCIAL STUDIES

30. A. The measures taken up by A.P. Government for the development of government schools in the state:

The Andhra Pradesh government, under the leadership of Chief Minister Y S Jagan Mohan Reddy and Education Minister Audimulapu Suresh, is undertaking sweeping school-level education reforms in the state .

The four pillars of change:

1. The most important shift is the medium of instruction being changed from Telugu to English; this has meant training both the existing teachers as well as the students.
2. The second is the improvement in curricula to best equip students for the emerging realities.
3. Then there is a massive revamp of school infrastructure.
4. Lastly, better facilities like more nutritious mid-day meals and free school supplies.

In this regard the state government has taken the following steps:

- a) The State government has set a target of modernising 15,715 schools in the State under the “Nadu-Nedu” programme for revamping the school-level infrastructure such as proper classroom furniture, clean running water, toilets etc.
- b) Smart TVs would be provided in each school for digital teaching.
- c) The government would also make arrangements to introduce English as a medium of instruction from Class 1 to Class 6 from the next academic year
- d) Introduced “Jagananna Ammavodi” scheme by crediting Rs.15000/- rupees in the mothers bank accounts of school going children.
- f) Reducing the monetary burden of schooling by providing free school supplies (such as books and uniforms - Vidya Kanuka kit ) to students.
- g) Upgraded the mid-day meal menu to make it more nutritious “Jagananna Gorumudda Scheme” has been started
- k) trying to establish skill development centres across the state.

(OR)

సాంఘిక శాస్త్రం సమున్నతం



# VISIT BEST SOCIAL TEACHER WEBSITE DEDICATED FOR EXCELLENCE IN SOCIAL STUDIES

30. B.

Problems of migrant labourers due to COVID -19 lock down

1. The migrants does not get government subsidies like ration cards.
2. Without such subsidies, they have to buy the food grains at higher rates for which major portion of their income is spent.
3. And also, they have to live in miserable conditions like slum areas where there are lack of facilities for education, sanitation, drainage, electricity etc.
4. Not maintaining proper sanitation, they may get more diseases for which they may not have sufficient medical facilities.
5. Their children will become dropouts and again they become labourers.

[www.bestsocialteacher.com](http://www.bestsocialteacher.com)

[www.bestsocialteacher.com](http://www.bestsocialteacher.com)



సాంఘిక శాస్త్రం సమున్నతం



# VISIT BEST SOCIAL TEACHER WEBSITE DEDICATED FOR EXCELLENCE IN SOCIAL STUDIES

**31. A.** Hitler said, “We do not consider it correct for the woman to interfere in the world of the man, in his main sphere” – How far are his words justifiable? Explain your opinion.

1. The words of Hitler are not justifiable.
2. In the views of Hitler, men and women belongs to a distinct world.
3. Women should be confined to bringing up children and to bear pain and suffering.
4. Of course,as a social norm, it is in a practise that men are making out a living and women are entrusted the responsibility of the children.
5. But, now the scenario changed. Because... Now-a-days women came into every field and succeeded.
6. Hence Hitler’s words shows his male supremacy.
7. But in the present society, women are in every sphere.  
They are not only holding household activities but also bread winners for the family.
8. In some institutions they are in key positions also.  
Hence, in my view we have to respect every women.

**31. B.** “The emergency period was a setback to the Indian democracy” – Do you agree with this statement? Explain.

Yes, I agree with the above statement.  
These setbacks happened to Indian democracy during the emergency period.

1. General Elections were postponed.
2. Many of the fundamental rights were suspended.
3. The press was censored
4. Most of political opponents were imprisoned.
5. Indira Gandhi granted herself extraordinary powers.
6. There were instances of arbitrary detention, torture.
7. Thus, the Emergency period was a set back to the Indian democracy



# VISIT BEST SOCIAL TEACHER WEBSITE DEDICATED FOR EXCELLENCE IN SOCIAL STUDIES

33.A

## Aspects of Cold War:

1. Two major ideological and political camps emerged in the post war period – The are the Communist block led by the USSR and the Democratic-Capitalist Block led by the USA.
2. On the one hand the USSR promoted the ideas of equality and state controlled development and suppression of opposition to these principles.
3. On the other hand USA promoted the ideas of multiparty democracy and private capitalist controlled process of development
4. It was a war in which the principal contenders did not physically attack each other or fight each other directly and hence, there was no 'hot' war.
5. Instead, a War was fought behind closed doors through propaganda and words.
6. It is called the Cold War simply because of the absence of a real fighting as in traditional wars
7. The Cold War created tension between the US and the USSR.
8. Some main tactics used during the Cold War included proxy wars, military alliances, and arms race.
9. The conducted new war related researches and increased their nuclear stock piles.

33.B

- i) Allied forces.
- ii) Germany's invasion on Poland
- iii) USA
- iv) Adolf Hitler.

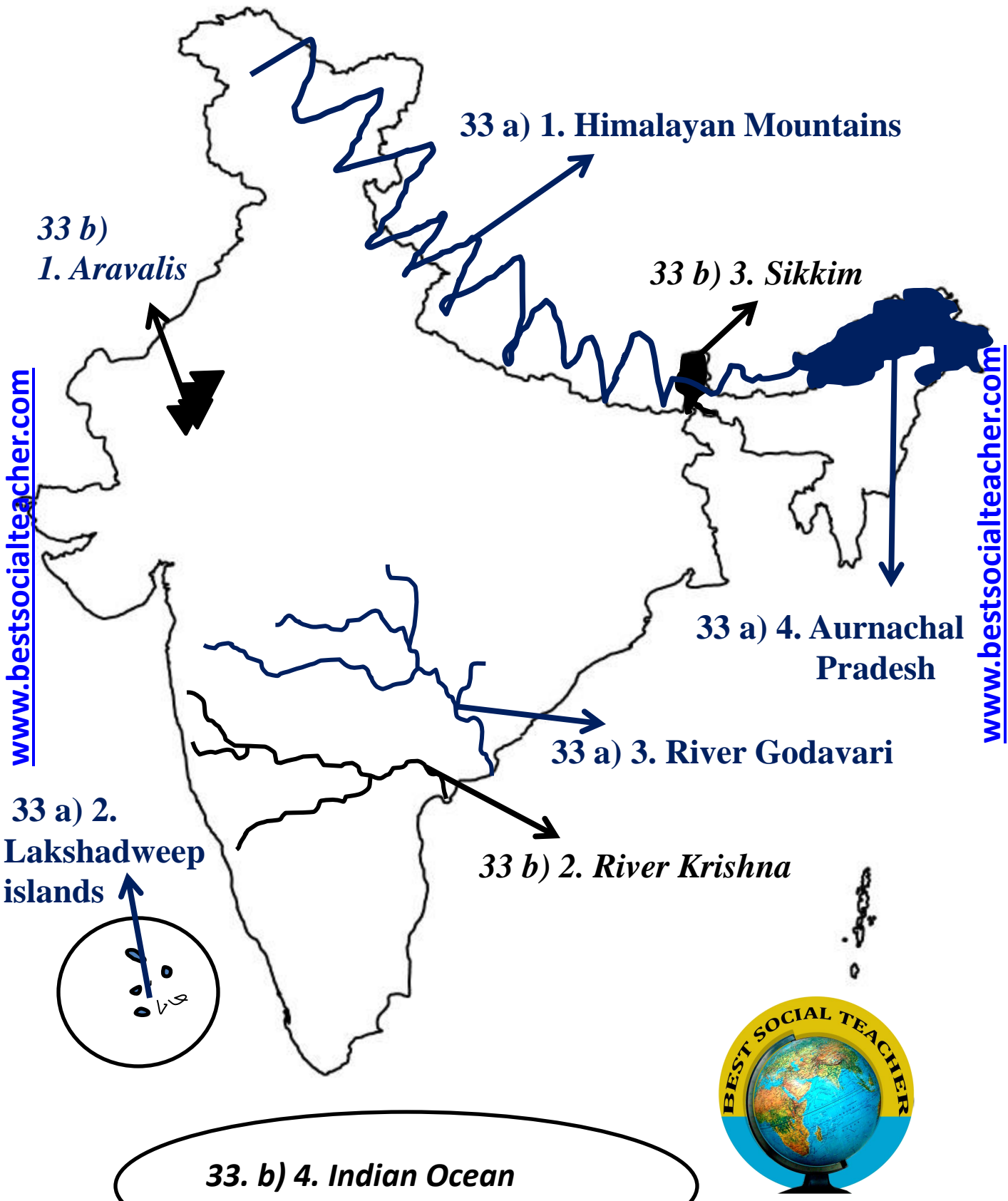


THE END

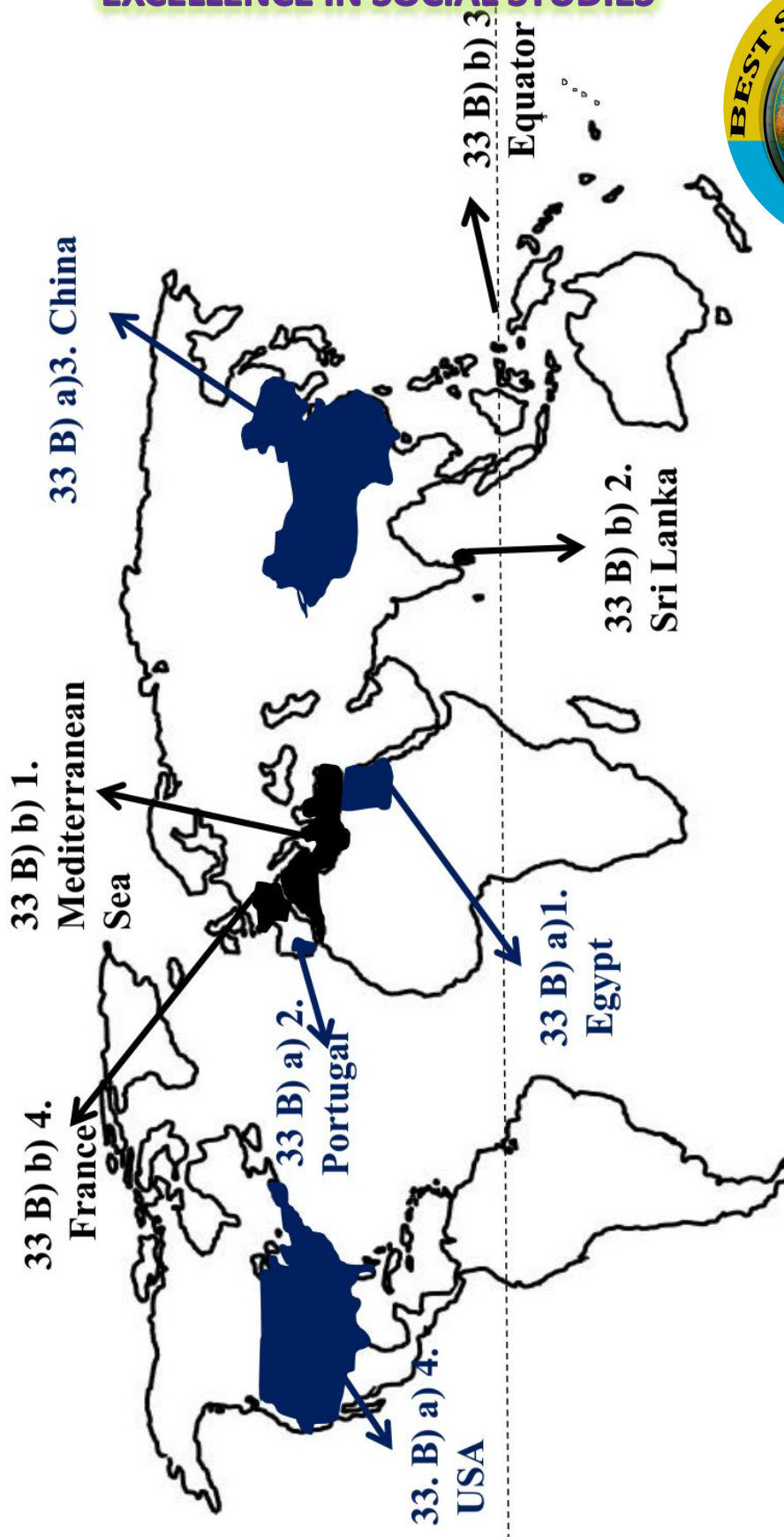
సాంఘిక శాస్త్రం సమున్నతం

**PREPARED BY**  
**KSV KRISHNA REDDY,**  
**GHM, ZPHS, GANTI, EGDt.**  
**ADMIN : BEST SOCIAL TEACHER**  
**WHATSAP GROUP**  
**9492146689**









VISIT BEST SOCIAL TEACHER WEBSITE DEDICATED FOR  
EXCELLENCE IN SOCIAL STUDIES



# సాంఘిక శాస్త్రం సమున్నతం

**Click on** this underlined weblink క్రింద గీత గీయబడిన వెబ్ లింక్ పై

**క్లిక్** చేయండి. మీకు నచ్చిన pdf డౌన్లోడ్ చేసుకోండి.

[www.bestsocialteacher.com](http://www.bestsocialteacher.com)

డైలీ టెస్ట్ ల కోసం TM/EM link

<https://www.bestsocialteacher.com/daily-test-for-x-class>

డైలీ టెస్ట్ ల సమాధానాల కోసం TM/EM

<https://www.bestsocialteacher.com/key-for-daily-tests>

పదవ తరగతి పరీక్షా పత్రాల బ్లూ ప్రింట్ కోసం, వివరణ వీడియో కోసం TM/EM

<https://www.bestsocialteacher.com/ssc-new-blue-print-social-studies-a>

పదవ తరగతి సోషల్ స్టడీస్ మెటీరియల్స్ కోసం TM/EM

<https://www.bestsocialteacher.com/materials-of-all-classes>

చాప్టర్ వారీగా ఇంపార్టెంట్ ప్రశ్నల కోసం TM/EM

<https://www.bestsocialteacher.com/chapter-wise-imp-questions-10-th-cl>

మ్యాపింగ్ స్కిల్స్ కోసం TM/EM VEDIOS

<https://www.bestsocialteacher.com/mapping-skills>

సోషల్ బిట్ బ్యాంకుల కోసం TM/EM

<https://www.bestsocialteacher.com/bit-banks>

సమాచార నైపుణ్యాల కోసం TM/EM

<https://www.bestsocialteacher.com/information-skills>

సోషల్ స్టడీస్ లో విద్యార్థులకు వచ్చే సందేశాల కోసం

<https://www.bestsocialteacher.com/doubts-in-social-studies>

సప్తగిరి చానల్ సాంఘిక శాస్త్ర విద్యామృతం వీడియోల కోసం

<https://www.bestsocialteacher.com/saptagiri-vidyamrutham-social-studi>

## All the best for your exams



## BEST SOCIAL TEACHER WHATSAPP GROUP

### బెస్ట్ సోషల్ టీచర్ వాట్సాప్ గ్రూపు నియమాలు

- పాఠశాల సమయంలో బెస్ట్ సోషల్ టీచర్ గ్రూపులో పోస్టులు చేయరాదు.
- గ్రూపులో వ్యక్తిగత చాటింగ్ చేయరాదు. అసంబద్ధ స్పిక్కర్లు పంపరాదు.  
(మీరు వ్యక్తిగత సెలవులో ఉన్నప్పటికీ పాఠశాల పనివేళలలో గ్రూపులో పోస్టింగ్స్ చేయరాదు)
- మన గ్రూపు సాంఘిక శాస్త్ర విషయచర్చకు సాంఘిక శాస్త్ర ఉపాధ్యాయులతో మాత్రమే ఏర్పరచబడినది. ఇతర సబ్జెక్టులవారిని చేర్చమని కోరరాదు. చేర్చరాదు.
- గ్రూపులో చేరదలచుకున్నవారు అడ్మిన్ వాట్సాప్ నెంబరుకు మాత్రమే తమ వివరములను (పేరు, పనిచేసే పాఠశాల, మండలం, జిల్లా) వాట్సాప్ సందేశం రూపంలో పంపవలెను. గ్రూపులో యాడింగ్ రిక్వెస్టు పంపరాదు. ఉపాధ్యాయునిలను వారి వ్యక్తిగత సమ్మతి లేకుండా గ్రూపులో చేర్చలేము. [www.bestsocialteacher.com](http://www.bestsocialteacher.com)
- అడ్మిన్ నెంబరు 9492146689 ను మీ ఫోన్ కాంటాక్ట్ లలో సేవ్ చేసుకొనవలెను. (ముఖ్యమైన సందేశములు మీకు వ్యక్తిగతంగా పంపే నిమిత్తం.)
- గ్రూపు సభ్యులందరూ తాము సబ్జెక్టులో తయారు చేసిన లేదా సేకరించిన అంశములను గ్రూపు సభ్యులతో పంచుకోవాలి. కేవలం స్వీకర్తలుగా ఉండరాదు.
- గుడ్మార్నింగ్, పండుగ శుభాకాంక్షలు, వ్యక్తిగత ఫోటోలు వంటివి గ్రూపులో పంపరాదు.
- వ్యక్తిగత దూషణలకు దిగరాదు. వ్యర్థ వాదనలు చేయరాదు.
- మీవంతుగా సబ్జెక్టు పరంగా మీ పాఠశాలలో చేసిన ఏ విషయమునైనా పంచవచ్చు.
- సబ్జెక్టు విషయములు తప్ప ఇతర విషయములు ఏవీ పోస్టు చేయరాదు.
- యూనియన్ మెసేజ్లు, అడ్వర్టైజ్ మెంట్లు, మూఢనమ్మకాలు గ్రూపులో పంచరాదు.
- సబ్జెక్టు సందేహములు మాత్రమే పోస్టు చేయవలెను. సబ్జెక్టులో సందేహములను నిష్ణాతులైన సభ్యులెవరైనా నివృత్తి చేయవచ్చు. కేవలం అడ్మిన్ మాత్రమే స్పందించాల్సిన పనిలేదు.
- వివిధ మతాలు, కులాలు, రాజకీయ పార్టీలను కించపరిచేలా మరియు ప్రభుత్వ విధానాలను, నాయకులను విమర్శిస్తూ సందేశాలు, వ్యాఖ్యలు చేయరాదు. ఇతరులు పంపే ఫార్వార్డింగ్ మెసేజ్లు సరైనవో కావో తెలియకుండా మన గ్రూపులో ఫార్వార్డ్ చేయరాదు.
- సబ్జెక్టుకు సంబంధించి మీరు గ్రూపులో షేర్ చేసే ప్రతీ ఫోటోకు, వీడియోకు వివరణ చేర్చవలెను.
- గ్రూపు నియమాలు పాటించని వారిని వెంటనే తొలగించుట జరుగును. దీనిపై అడ్మిన్ దే తుది నిర్ణయం. మీరు వాట్సాప్ నెంబరు మార్చుకున్నప్పుడు, గ్రూపును విడిచేటప్పుడు అడ్మిన్ కు తెలియపరచవలెను. లేనట్లయితే మరళా చేర్చే అవకాశాన్ని కోల్పోతారు. పదవీ విరమణ పొందే వారు అడ్మిన్ కు తెలియపరిచి వైదొలగాలి. మరళా చేర్చకుండా ఉండేందుకు.

[www.bestsocialteacher.com](http://www.bestsocialteacher.com)

**FOR LATEST UPDATES IN SOCIAL STUDIES JOIN IN  
BEST SOCIAL TEACHER  
WHATSAPP GROUP**

TO JOIN IN GROUP SEND YOUR DETAILS TO  
**GROUP ADMIN**

**KSV KRISHNA REDDY, GHM,  
ZPHS, GANTI, EAST GODAVARI  
ADMIN NO. 9492146689.**



సాంఘిక శాస్త్రం సమున్నతం

