

B. KRISHNA NAIK'S

SSC NEW MODEL PAPERS

SOCIAL STUDIES

MODEL PAPER – 1

(100 MARKS)

ENGLISH MEDIUM



సాంఘిక శాస్త్రం సమున్నతం



B. KRISHNA NAIK, M.A., B.Ed.,
SA, SS,
ZP BOYS HIGH SCHOOL
GALIVEEDU,
KADAPA
9492411307

BEST SOCIAL TEACHER WHATSAPP GROUP

బెస్ట్ సోషల్ టీచర్ వాట్సాప్ గ్రూపు నియమాలు

- ❑ అడ్మిన్ వాట్సాప్ నెంబరును **9492146689** మీ ఫోన్ కాంటాక్ట్స్ నందు సేవ్ చేసుకోండి.
(మీకు అవసరమైన ముఖ్యమైన సందేహాల నివృత్తికొరకు మీకు వ్యక్తిగతంగా పంపే నిమిత్తం.)
- ❑ పాఠశాల సమయంలో బెస్ట్ సోషల్ టీచర్ గ్రూపులో పోస్టులు చేయరాదు.
- ❑ గ్రూపు సభ్యులతో గ్రూపులో వ్యక్తిగత చాటింగ్ చేయరాదు. కేవలం సబ్జెక్టు అంశాలను మాత్రమే చర్చించాలి.
అసంబద్ధ స్టిక్కర్లు, ఇమోజీలు, చేతి గుర్తులు పంపరాదు. (మీరు వ్యక్తిగత సెలవులో ఉన్నప్పటికీ పాఠశాల పనివేళలలో గ్రూపులో పోస్టింగ్స్ చేయరాదు)
- ❑ మన గ్రూపు సాంఘిక శాస్త్ర విషయచర్చకు సాంఘిక శాస్త్ర ఉపాధ్యాయులతో మాత్రమే ఏర్పరచబడినది.
ఇతర సబ్జెక్టులవారిని చేర్చమని కోరరాదు. చేర్చరాదు.
- ❑ గ్రూపులో చేరదలచుకున్నవారు అడ్మిన్ వాట్సాప్ నెంబరును తమ ఫోన్ కాంటాక్ట్ లలో సేవ్ చేసుకుని వారి వాట్సాపు నుండి మాత్రమే వారి వివరములను (పేరు, పనిచేసే పాఠశాల, మండలం, జిల్లా వాట్సాప్ నెంబరు) వాట్సాప్ సందేశం రూపంలో పంపవలెను.
- ❑ బెస్ట్ సోషల్ టీచర్ వాట్సాప్ గ్రూపులో యాడింగ్ రిక్వెస్టు పంపరాదు. మహిళా ఉపాధ్యాయులను వారి వ్యక్తిగత సమ్మతి లేకుండా గ్రూపులో చేర్చలేము.
- ❑ గ్రూపు సభ్యులందరూ తాము సబ్జెక్టులో తయారు చేసిన లేదా సేకరించిన అంశములను గ్రూపు సభ్యులతో పంచుకోవాలి. కేవలం స్వీకర్తలుగా ఉండరాదు.
- ❑ గుడ్మార్నింగ్, పండుగ శుభాకాంక్షలు, వ్యక్తిగత ఫోటోలు వంటివి గ్రూపులో పంపరాదు.
- ❑ వ్యక్తిగత దూషణలకు దిగరాదు. వ్యర్థ వాదనలు చేయరాదు.
- ❑ మీవంతుగా సబ్జెక్టు పరంగా మీ పాఠశాలలో చేసిన ఏ విషయమునైనా పంచవచ్చు. సబ్జెక్టు విషయములు తప్ప ఇతర విషయములు ఏవీ పోస్టు చేయరాదు.
- ❑ యూనియన్ మెసేజ్లు, అడ్వర్టైజ్ మెంట్లు, మూఢనమ్మకాలు, దేవుని ఫోటోలు, మతపరమైన వాక్యములు, గ్రూపులో పంచరాదు. హేతు బద్ధమైన శాస్త్రీయమైన అంశాలు చర్చించాలి.
- ❑ సబ్జెక్టు సందేహములు మాత్రమే పోస్టు చేయవలెను. సబ్జెక్టులో సందేహములను నిష్కాతులైన సభ్యులెవరైనా నివృత్తి చేయవచ్చు. కేవలం అడ్మిన్ మాత్రమే స్పందించాల్సిన పనిలేదు.
- ❑ వివిధ మతాలు, కులాలు, రాజకీయ పార్టీలను కించపరిచేలా మరియు ప్రభుత్వ విధానాలను, నాయకులను విమర్శిస్తూ సందేశాలు, వ్యాఖ్యలు, ఫోటోలు పోస్ట్ చేయరాదు. ఇతరులు పంపే ఫార్వార్డింగ్ మెసేజ్లు సరైనవో కావో నిజ నిర్ధారణ చేసుకోకుండా మన గ్రూపులో ఫార్వార్డ్ చేయరాదు.
- ❑ సబ్జెక్టుకు సంబంధించి మీరు గ్రూపులో షేర్ చేసే ప్రతీ ఫోటోకు, వీడియోకు వివరణ చేర్చవలెను.
- ❑ గ్రూపు నియమాలు పాటించని వారిని వెంటనే తొలగించుట జరుగును. దీనిపై అడ్మిన్ దే తుది నిర్ణయం.
- ❑ మీరు వాట్సాప్ నెంబరు మార్చుకున్నప్పుడు, గ్రూపును విడిచేటప్పుడు అడ్మిన్ కు తెలియపరచవలెను. లేనట్లయితే మరళా చేర్చే అవకాశాన్ని కోల్పోతారు.
- ❑ పదవీ విరమణ పొందినవారు, గ్రూపు నచ్చక గ్రూపును విడిచిపెట్టేవారు అడ్మిన్ కు తెలియపరిచి వైదొలగాలి. మరళా చేర్చకుండా ఉండేందుకు.

9492146689 www.bestsocialteacher.com

SAVE ADMIN NUMBER IN YOUR PHONE CONTACTS

FOR LATEST UPDATES IN SOCIAL STUDIES JOIN IN

**BEST SOCIAL TEACHER
WHATSAPP GROUP**

TO JOIN IN GROUP SEND YOUR DETAILS TO
GROUP ADMIN

KSV KRISHNA REDDY, GHM,

**సాంఘిక శాస్త్రం సమున్నతం ZPHS, ETHAKOTA, EAST GODAVARI
ADMIN NO. 9492146689.**



Model paper-5

SUMMATIVE ASSESSMENT - I - 2021 - 22

SOCIAL STUDIES

(English Medium)

1

Class : X

(Max. Marks:100)

Time : 3.15 Mnts.

	AS - I				AS - II				AS - III				AS - IV				AS - V			
Q.No	1-4	13-16	21-23	29-30	5-6	17	24-25	31	7-8	18-19	26	9-11	27	32	12	20	28	33		
Marks																				
Total																				

Name of the student : Roll Number :

INSTRUCTIONS :

1. 15 minutes are allotted for reading the question paper in addition to 3.00 hour's which is allotted for writing the answers.
2. All answers should be written in the separate answer booklet.
3. There are four sections in the question paper.
4. There is an internal choice in section - IV.
5. In question No. 33 both A & B (India map and World map) should be answered separately.

SECTION - I

Note : 1. Answer all questions.

2. Each question carries 1 Mark.

12 x 1 = 12

1. Which longitude is taken as Indian Standard meridian?
2. Expand GDP
3. What is meant by "Organised Sector"?
4. Identify which is not a Himalayan River (River Ganges, River Indus, River Krishna, River Brahmaputra)
5. Who called that the 20th Century as "The age of Extremes"?
6. What was the immediate cause for the world war - II ?
7. Who established Nazi Party?
8. Name the movement which was started in 1942 August by Gandhiji?

9 Who wrote the poem of "Sare Jahan Se Acha Hindustan Hamara"?

10 Name the international organisation which was established after World war-I?

11 Plot the information on bar graph?

Name of the state	IMR per 1000 (2006)
Himachal Pradesh	36
Bihar	62



12. Arrange the given states from North to South.

Tamilnadu, Haryana, Madhya pradesh, Telangana.

2

SECTION - II

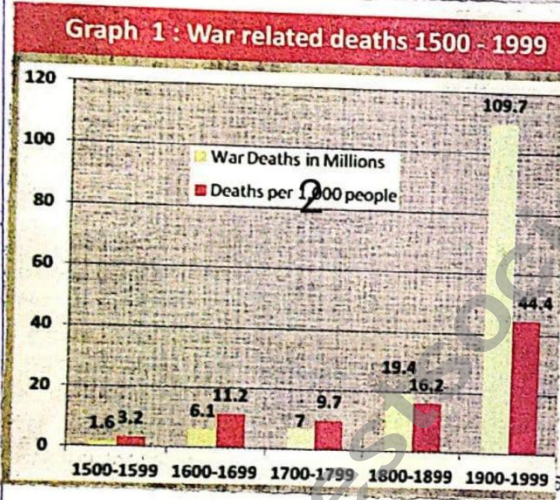
te : 1. Answer all the questions.

2. Each question carries 2 Marks.

8 x 2 = 16

13. What are the major Relief divisions in India
14. Write any two consequences of the world wars
15. How many categories of economic activities are there? What are they?
16. With the creation of muslim nation, Pakistan, a painful and unimaginable situation arose before many people in 1947. - Comment.
17. The drains on rivers have gradually lost its water storage capacity in present days. Write any two reasons for it.
18. Write any two slogans to control global warming.
19. Observe the given graph and analyze it.

R. K. Singh



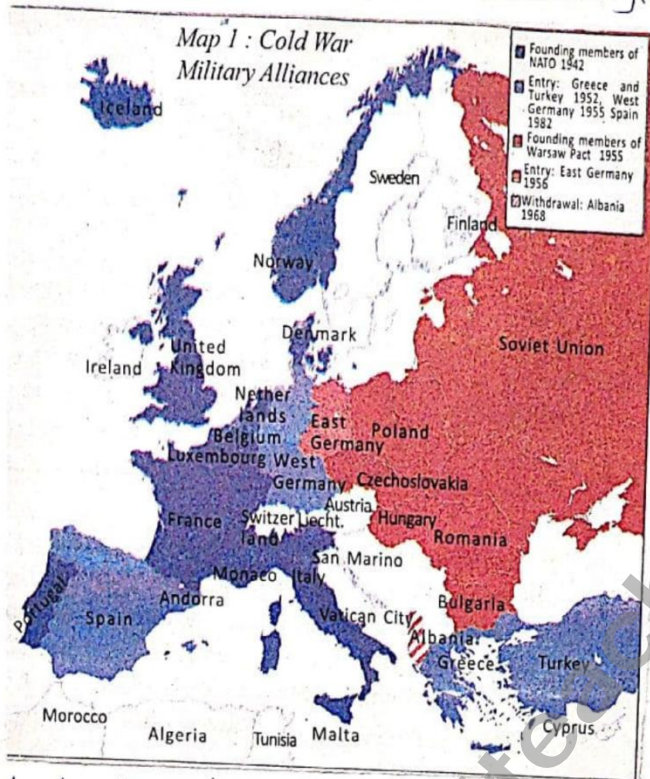
BEST SOCIAL TEACHER
WHATSAPP GROUP
9492146689



సాంఘిక శాస్త్రం సమున్నతం

www.bestsocialteacher.com

20 observe the map and answer the questions given below.



3



- i) What does the above map explain?
- ii) Write any one island from given map?

BEST SOCIAL TEACHER
WHATSAPP GROUP
9492146689

SECTION - III

Note : 1. Answer all questions.

2. Each question carries 4 Marks.

8 x 4 = 32

21. Write about the importance of Himalayas
22. Write about the south west monsoon system in India.
23. Write any four results of the great depression.
24. Write the role of Subhash Chandra Bose in Indian National movement.
25. Write any two slogans to control water pollution.
26. Write any four suggestions to avoid wars and maintain world peace.
27. Observe the given information and answer the questions given below.

- i) In which country the Bloody Sunday and the revolution happened?
- ii) What is Civil war ?

Debates over socialism in Russia.	• 1850s-1880s
Formation of the Russian Social Democratic Workers Party.	• 1898
The Bloody Sunday and the Revolution	• 1905
2nd March - Abdication of the Tsar. 24th October - Bolshevik uprising in Petrograd.	• 1917
The Civil War	• 1918-20
Formation of Comintern	• 1919
Beginning of Collectivisation	• 1929



28 observe the map and answer the questions given below.



4



Rajiv

- i) Which mountains are located as northern boundary to Deccan plateau?
- ii) Name the oldest folded mountains in India?

SECTION - IV

- te :
1. Answer all questions.
 2. Each question carries 8 Marks.
 3. There is an internal choice for each question $5 \times 8 = 40$
29. a) Explain about the schooling evolution in Himachal Pradesh.
(Or)
b) How are human activities contributing to Global warming.
 30. a) "Both the two world wars effected all the countries in the world during the first half of the 20th Century." Do you agree with the statement? Or oppose it?
(Or)
b) "Integration of various princely states into the new Indian nation was a challenging task." - comment.

[Contd... 5th



BEST SOCIAL TEACHER

WHATSAPP GROUP

9492146689

www.bestsocialteacher.com

31

- a) What are disagreements between "Developed" and "Developing" countries about AGW?

(Or)

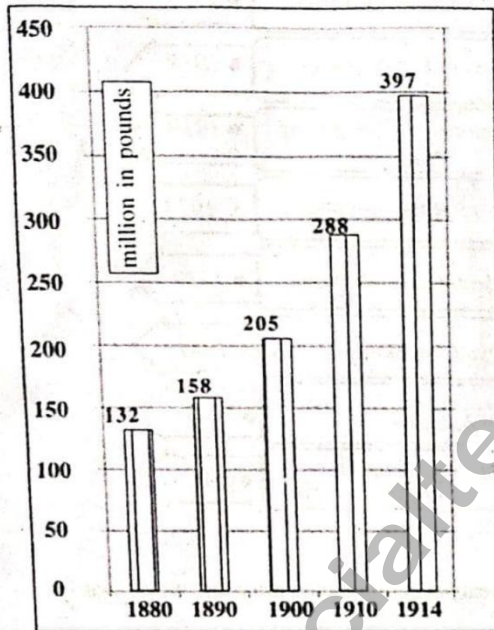
5

- b) Which aspects of farming practices were regulated in the context of Hiware Bazar to improve the water conservation?

32

- a) Observe the graph and answer the questions given below.

The Armaments Race




BEST SOCIAL TEACHER
WHATSAPP GROUP
9492146689

- i) What does the graph explain
 ii) What was the military expenditure by the great powers in 1880?
 iii) What was the military expenditure by the great powers in 1914?
 iv) What was the major incident happened in 1914?

(Or)

- b) Observe the timeline chart and answer the following questions.



www.bestsocialteacher.com



- a) Which country took place the bloody Sunday?
b) When did Tsar Nicholas-II abdicated?
c) What is called collectivisation?
d) In which year form the Comintern?

6

R. Singh

33 Locate the following given outline map of India.

- 1) Punjab 2) $82\frac{1}{2}^{\circ}$ E longitude 3) K₂ peak 4) River Ganga
(OR)

- 1) Asom 2) Indian ocean
3) River Tungabhadra 4) Vindhya and Satpura mountains

b Locate the following on given map of India world

- 1) India 2) Brazil 3) Pacific ocean 4) Palk straight

(OR)

- 1) Yugoslavia 2) Denmark 3) Netherlands 4) Red sea

BEST SOCIAL TEACHER

WHATSAPP GROUP

9492146689



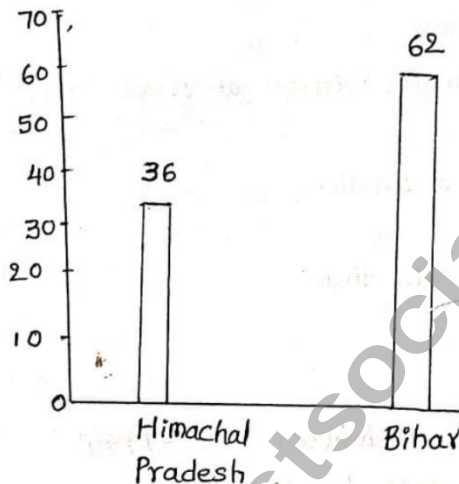
www.bestsocialteacher.com

Section: I

Answers

7

1. $82\frac{1}{2}^{\circ}$ Eastern longitude.
2. Gross Domestic Product
3. A sector where terms and conditions of employment are regular is called "organised sector".
4. River Krishna
5. Eric Hobsbawm.
6. German invasion of Poland on 1 Sep 1939.
7. Adolf Hitler.
8. Quit India movement.
9. Mohammad Iqbal
10. League of Nations
- 11.



12. Haryana, Madhya Pradesh, Telangana, Tamil Nadu.

Section: II

13. 1) The Himalayas 2) The Indo-Gangetic plains 3) The peninsular plateau.
4) The Coastal plains 5) The Desert 6) The Islands.
14. Consequences of world wars:
 - 1) Enormous cost, almost 10 million people were killed in WW-I
 - 2) 20-25 million people were killed in WW-II
 - 3) 100 countries walked into independence.
 - 4) Democratic principles asserted.
 - 5) Roman empire, German empire and Ottoman empires ended.
 - 6) Change in balance of power.
 - 7) Woman got right to vote.
 - 8) League of Nations emerged after end of the world war-I
 - 9) UNO emerged in 1945 after the end of world war-II.



BEST SOCIAL TEACHER
WHATSAPP GROUP
9492146689

15 Economic activities classified into 3 categories.

- 1) primary sector :- Agriculture and allied activities.
- 2) secondary sector :- Industries and major constructions.
- 3) Service sector :- All the public and private services.

8

- 16
- 1) The creation of Pakistan was a painful situation.
 - 2) Most of them insecure in borders of both countries.
 - 3) Hindu and muslim hatred against each other.
 - 4) About 15 million people were displaced.
 - 5) They burnt, and looted the properties.
 - 6) Nearly 5 lakh people were killed.
 - 7) They became refugees.
 - 8) They moved to find new homes.

Answer



17 The main reasons for decrease in water storage of dams are:

- 1) Lack of rainfall.
 - 2) Soil erosion and accumulation of waste.
 - 3) Excessive extraction of minerals.
 - 4) People misuse the Dams and pollute them.
- 18
- 1) Save nature save the future
 - 2) Go green and protect your self.

BEST SOCIAL TEACHER
WHATSAPP GROUP
9492146689

- 19
- 1) The graph shows war related death between 1500-1999.
 - 2) Deaths and deaths per 1000 people were low in 1500-1599.
 - 3) War deaths and death rates very high in 1990-1999.
 - 4) Due to the two world wars, deaths were very high between 1990-1999.
- 20
- i) The map explain about military alliances during world war-II.
 - ii) England, Iceland, Ireland.

Section: III

- 21
- 1) The Himalayas play a significance role influencing climatic conditions of India.
 - 2) The Himalayas are the barrier for India, it protects the Northern plains from the cold winds from the central Asia.
 - 3) The Himalayas causes monsoon in Indian peninsula.
 - 4) In absense of Himalayas, India became a Desert
 - 5) Perennial rivers were origin from Himalayas
 - 6) ∴ Himalayan rivers bought Alluvial soil, and formed Indo- Gangetic plain



- 1) Himalayan rivers serve water for irrigation.
- 8) Himalayas protect from foreign invasions.

9

22 Monsoon:- Seasonal change in the direction of winds of a region

- 1) The term monsoon derived from the Arabic word "Mousam", it means season.
- 2) In India southwest monsoon give more rain.
- 3) June - September is a period of southwest monsoon.
- 4) Southwest monsoon originate from Arabian sea and Bay of Bengal.
- 5) October - November is a period of the retreat of the monsoon.
- 6) Tamilnadu and Southern part of Andhra Pradesh get more rains during retreat of the monsoon.

- 23
- 1) The German economy was worst hit by the Depression.
 - 2) By the 1932, German production was reduced to 40% of the 1929.
 - 3) By the 1932, 6 million youth were unemployed.
 - 4) German youth hanged placards around their necks saying, "willing to do any work".
 - 5) USA also affected by the Great Depression
 - 6) 25% Americans were unemployed.
 - 7) 33% of other countries people unemployed.
 - 8) However, USA recovered from Depression.
 - 9) USA helped Germany to stabilize.

R. Ravi



24 Role of Subhash Chandra Bose in freedom struggle:

- 1) Subhash chandra Bose was an Indian revolutionary
- 2) Subhash chandra Bose recruited prisoners of wars in Indian National Army.
- 3) Gandhiji did not agree with the plans of Bose.
- 4) Subhash chandra Bose went secretly to Germany and then to Japan and raised army.
- 5) Indian Army fight alongside Japan against the British.
- 6) Subhash chandra Bose died in 1945
- 7) Bose gave a slogan "Dilli (Delhi) Chalo".
- 8) Bose popularly known as "Netaji"

- 25
- 1) Go green and drink clean.
 - 2) water pollution is a bad solution.
 - 3) Make a notion, save the ocean.
 - 4) without water, life is rotter.



BEST SOCIAL TEACHER
WHATSAPP GROUP
9492146689

- 26
- 1) Talking to each other country's and becoming friends.
 - 2) Solve the problems with negotiations.
 - 3) Don't interfere in internal affairs of other countries.
 - 4) Reducing military expenditure.
 - 5) International organisations ~~thru~~ creating international cooperations and prevent wars.

- 27
- i) Russia
 - ii) A war between the citizens of the same country.

- 28
- i) Vindhya, Satpura mountains.
 - ii) Aravali mountains.

Section: IV

- 29
- 1) Himachal government and the people ^{were} keen on the education
 - 2) The government started the schools in all the remote areas.
 - 3) Government of Himachal implemented free education
 - 4) Himachal government expense 2005 rupees per each student for education
 - 5) Other Indian states expense only 1049 rupee per children
 - 6) Government should provide drinking water, toilets and construct buildings.
 - 7) Well qualified teachers recruited.
 - 8) The Himachal government highest spending on education from budget.

(OR)

- b)
- 1) Burning of fossil fuels.
 - 2) Over extraction of minerals.
 - 3) Usage of air conditioners and refrigerators leads to global warming.
 - 4) Usage of chemical fertilizers and pesticides.
 - 5) De-forestation leads to global warming.
 - 6) Usage of plastic bags.
 - 7) These increases the amount of carbon dioxide in the atmosphere
 - 8) These leads to an increase in the Greenhouse Effect.

- 30
- a.
- 1) Yes World wars affected all the countries.
 - 2) The world war-1 broke out in 1914 and ended in 1918
 - 3) WW-1 long lasted 4 years.
 - 4) WW-1 was truly a world war, because no one country escape from it.
 - 5) WW-2 broke out in 1939 and ended in 1945.



Requires



- 6) Britain, France, USSR and USA formed allies and Germany, Italy, Japan formed as central powers.
- 7) Allied powers defeated central powers in WW-1, and WW-2.
- 8) World Wars effected all the countries.

11



(OR)

- b) 1) I agree with this statement.
- 2) At the time of independence of India, there were 550 princely states in India.
- 3) Indian independence Act of 1947 gave princely states an option to join India, Pakistan or remain independent.
- 4) Most of the princely states join in India.
- 5) Hyderabad, Kashmir, Junagadh refused to join in India.
- 6) Sardar Vallabhai Patel responsible for the integration of princely states in India.
- 7) Junagadh integrated with India by plebiscite.
- 8) Hyderabad integrated with India by police action.
- 9) With initiative Nehru and Patel Kashmir also integrated in India.

31) Disagreement between developed and developing countries

- a) 1) AGW: Anthropogenic global warming, it means caused by humans.
- 2) Developed countries want developing countries to cut down on burning coal.
- 3) Developing countries argue that developed countries have developed by burning the fossil fuel.
- 4) Developing countries say that their economic development seriously damaged if don't burn fossil fuel.
- 5) Developed countries find the alternatives that can help the developing countries.
- 6) These are the disagreements between developed and developing countries.

(OR)

Explain



- b) 1) Charai bandi - Ban of free grazing
- 2) Nasbandi - family planning
- 3) Nashabandi - Ban of liquor.
- 4) Kurhad bandi - Ban of felling trees.
- 5) They constructing percolation tanks for recharge groundwater.
- 6) Ban of water intensive crops like sugarcane.
- 7) promoting dairy farming
- 8) Trenches were construct at steep slope in hilly areas

- 32) a) i) Military expenditure by 6 great powers (Germany, Austria-Hungary, Italy, Britain, France, Russia) during 1800-1914
- ii) 132 million pounds.
- iii) 397 million pounds. iv) World War-1.

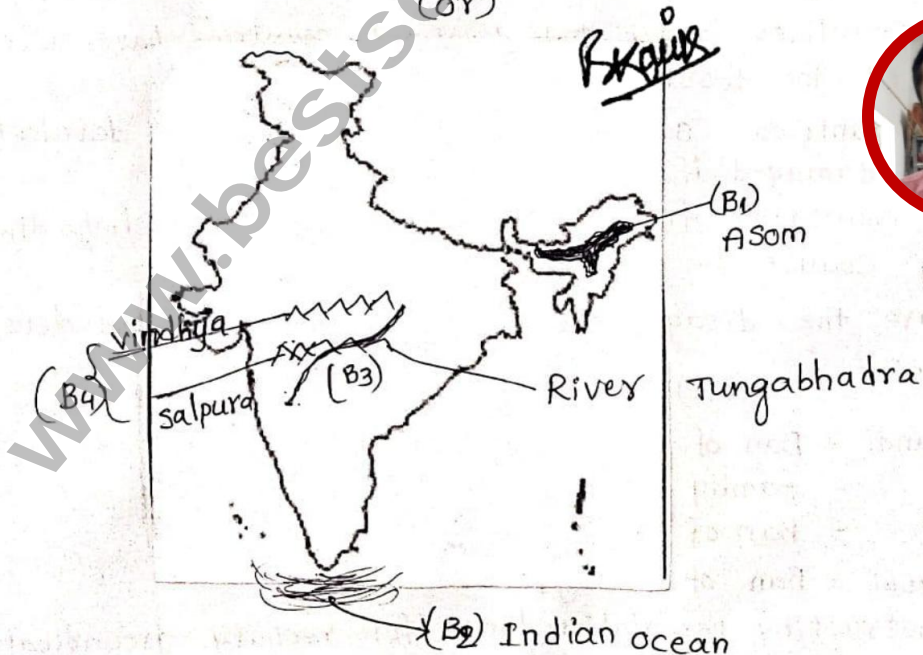
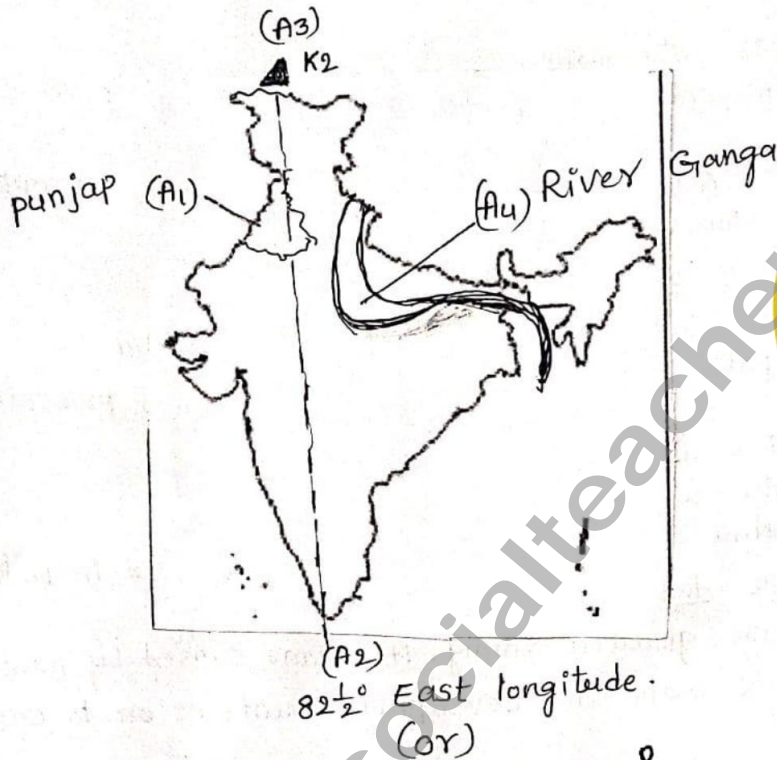
BEST SOCIAL TEACHER

WHATSAPP GROUP

9492146689

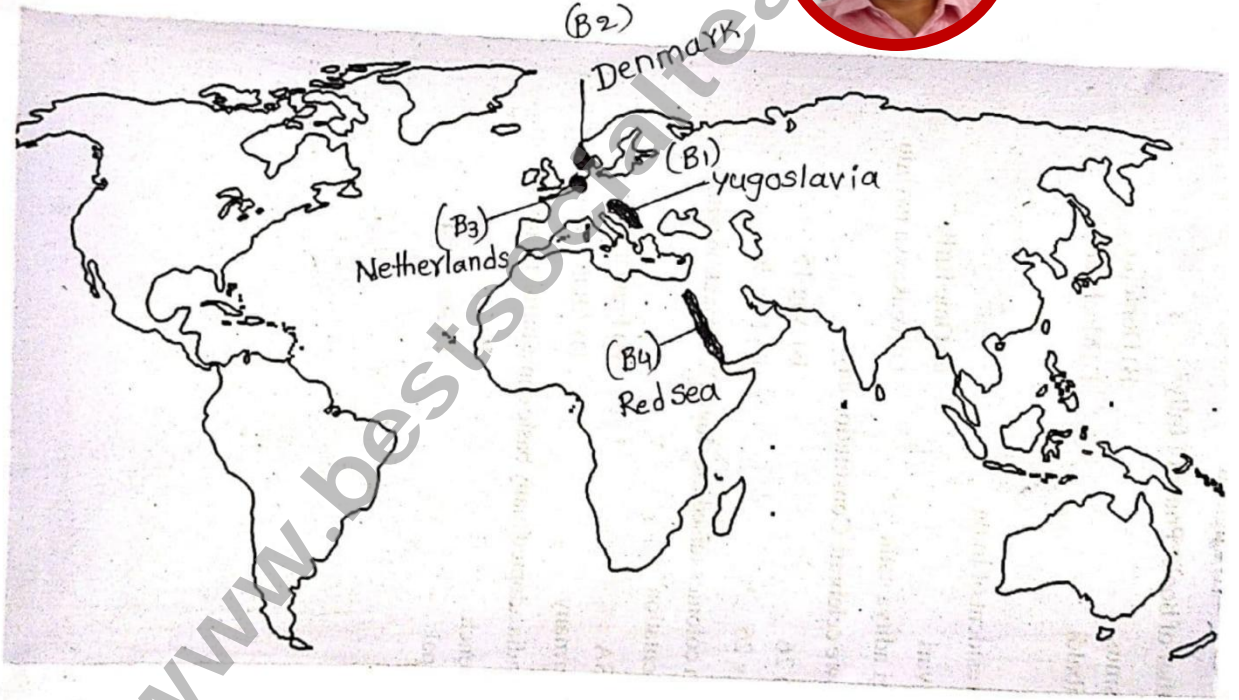
- b.
- i) Russia
 - ii) 1917
 - iii) peasants would work together is called "collectivisation"
 - iv) 1919

33 India map





Figure



సాంఘిక శాస్త్రం సమున్నతం



BEST SOCIAL TEACHER
WHATSAPP GROUP
9492146689

www.bestsocialteacher.com

**VISIT BEST SOCIAL TEACHER WEBSITE DEDICATED FOR
EXCELLENCE IN SOCIAL STUDIES**



Click on this underlined weblink క్రింద గీత గీయబడిన వెబ్ లింక్ పై

క్లిక్ చేయండి. మీకు నచ్చిన pdf డౌన్లోడ్ చేసుకోండి.

www.bestsocialteacher.com

డైలీ టెస్ట్ ల కోసం TM/EM link

<https://www.bestsocialteacher.com/daily-test-for-x-class>

డైలీ టెస్ట్ ల సమాధానాల కోసం TM/EM

<https://www.bestsocialteacher.com/key-for-daily-tests>

పదవ తరగతి పరీక్షా పత్రాల బ్లా ప్రింట్ కోసం, వివరణ వీడియో కోసం TM/EM

<https://www.bestsocialteacher.com/ssc-new-blue-print-social-studies-a>

పదవ తరగతి సోషల్ స్టడీస్ మెటీరియల్స్ కోసం TM/EM

<https://www.bestsocialteacher.com/materials-of-all-classes>

చాప్టర్ వారీగా ఇంపార్టెంట్ ప్రశ్నల కోసం TM/EM

<https://www.bestsocialteacher.com/chapter-wise-imp-questions-10-th-cl>

మ్యాపింగ్ స్కిల్స్ కోసం TM/EM vedios

<https://www.bestsocialteacher.com/mapping-skills>

సోషల్ బిట్ బ్యాంకుల కోసం TM/EM

<https://www.bestsocialteacher.com/bit-banks>

సమాచార నైపుణ్యాల కోసం TM/EM

<https://www.bestsocialteacher.com/information-skills>

సోషల్ స్టడీస్ లో విద్యార్థులకు వచ్చే సందేశాల కోసం

<https://www.bestsocialteacher.com/doubts-in-social-studies>

సప్తగిరి చానల్ సాంఘిక శాస్త్ర విద్యామృతం వీడియోల కోసం

<https://www.bestsocialteacher.com/saptagiri-vidyamrutham-social-studi>

www.bestsocialteacher.com

All the best for your exams